



Determine which letter best represents the sum.

1)  $\frac{5}{8} + \frac{4}{8}$

3)  $\frac{1}{2} + \frac{1}{2}$

5)  $\frac{2}{4} + \frac{2}{4}$

7)  $\frac{5}{6} + \frac{5}{6}$

9)  $\frac{2}{3} + \frac{1}{3}$

11)  $\frac{8}{10} + \frac{5}{10}$

13)  $\frac{6}{8} + \frac{4}{8}$

2)  $\frac{4}{5} + \frac{4}{5}$

4)  $\frac{4}{6} + \frac{5}{6}$

6)  $\frac{4}{10} + \frac{5}{10}$

8)  $\frac{1}{8} + \frac{2}{8}$

10)  $\frac{7}{10} + \frac{3}{10}$

12)  $\frac{5}{8} + \frac{6}{8}$

14)  $\frac{1}{6} + \frac{4}{6}$

Answers

1. \_\_\_\_\_

2. \_\_\_\_\_

3. \_\_\_\_\_

4. \_\_\_\_\_

5. \_\_\_\_\_

6. \_\_\_\_\_

7. \_\_\_\_\_

8. \_\_\_\_\_

9. \_\_\_\_\_

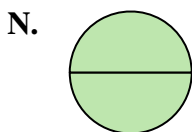
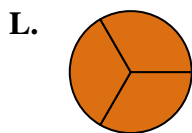
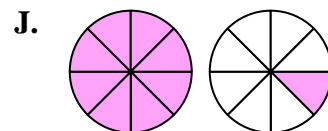
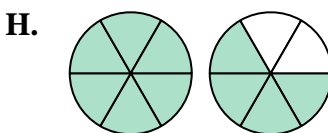
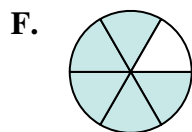
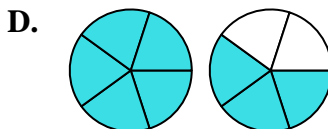
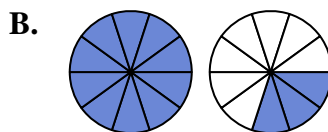
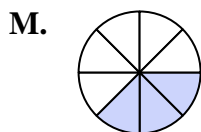
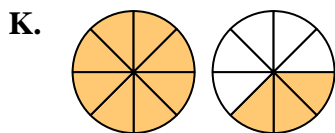
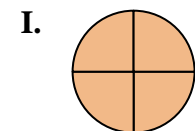
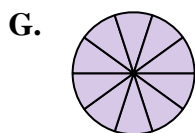
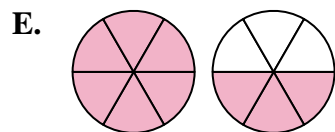
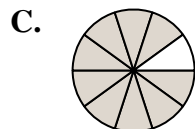
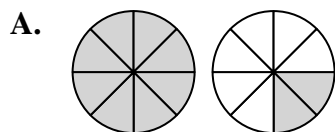
10. \_\_\_\_\_

11. \_\_\_\_\_

12. \_\_\_\_\_

13. \_\_\_\_\_

14. \_\_\_\_\_





Determine which letter best represents the sum.

1)  $\frac{5}{8} + \frac{4}{8}$

3)  $\frac{1}{2} + \frac{1}{2}$

5)  $\frac{2}{4} + \frac{2}{4}$

7)  $\frac{5}{6} + \frac{5}{6}$

9)  $\frac{2}{3} + \frac{1}{3}$

11)  $\frac{8}{10} + \frac{5}{10}$

13)  $\frac{6}{8} + \frac{4}{8}$

2)  $\frac{4}{5} + \frac{4}{5}$

4)  $\frac{4}{6} + \frac{5}{6}$

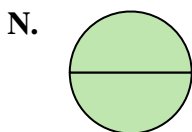
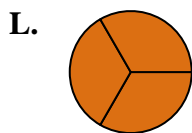
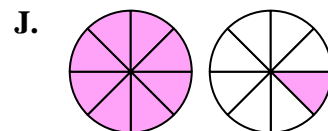
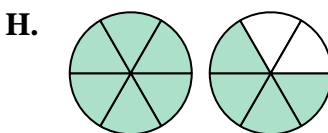
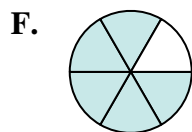
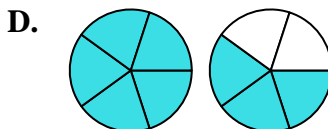
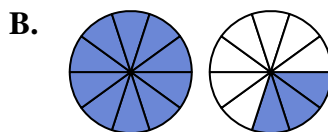
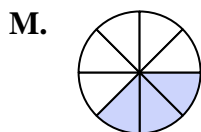
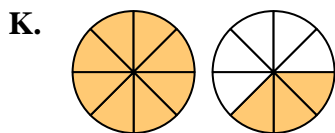
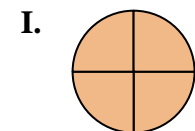
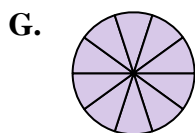
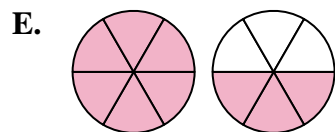
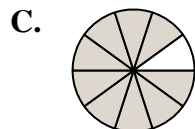
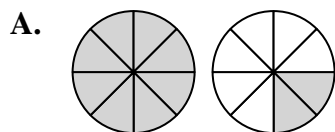
6)  $\frac{4}{10} + \frac{5}{10}$

8)  $\frac{1}{8} + \frac{2}{8}$

10)  $\frac{7}{10} + \frac{3}{10}$

12)  $\frac{5}{8} + \frac{6}{8}$

14)  $\frac{1}{6} + \frac{4}{6}$



**Answers**

1. **J**  $1\frac{1}{8}$

2. **D**  $1\frac{3}{5}$

3. **N**  $\frac{2}{2}$

4. **E**  $1\frac{3}{6}$

5. **I**  $\frac{4}{4}$

6. **C**  $\frac{9}{10}$

7. **H**  $1\frac{4}{6}$

8. **M**  $\frac{3}{8}$

9. **L**  $\frac{3}{3}$

10. **G**  $\frac{10}{10}$

11. **B**  $1\frac{3}{10}$

12. **K**  $1\frac{3}{8}$

13. **A**  $1\frac{2}{8}$

14. **F**  $\frac{5}{6}$